

Quantum Processes and Computation

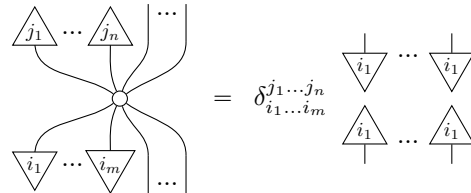
Assignment 5, Friday, 11 Nov

Deadline: Fri Week 6 (Groups 3 and 4), Weds Week 7 (Groups 1 and 2)

Goals: After completing these problems, you will be able to work with spiders, unbiased/phase states, and the phase group.

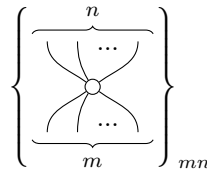
Note: Many of these exercises also appear in *Picturing Quantum Processes*, but sometimes they have been modified for the problem sheet. The corresponding exercise number from the book is shown in brackets. **If you are stuck, try looking up the exercise number in the book. Usually the definitions or equations you need are nearby.**

Exercise 1 (8.32): Prove the *generalised copy rule* for spiders:

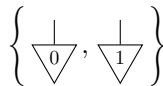


where $\delta_{i_1, \dots, i_m}^{j_1, \dots, j_n}$ is the generalised Kronecker delta that is 1 when all the in- and outputs match and is 0 otherwise.

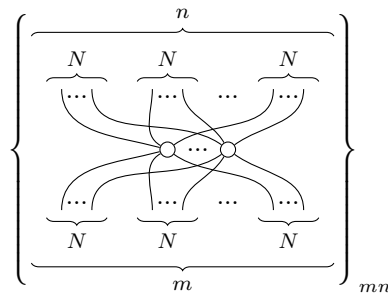
Exercise 2 (8.39): The spiders:



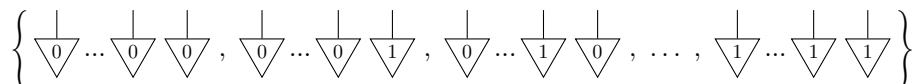
for the 2D basis:



are associated with *bits*. Show that the following family of classical maps:



is also a family of spiders (i.e. that it fits into Definition 8.31) and that it is associated with the ONB of *N-bitstrings*:



Exercise 3 (8.37 & 8.38):

- (i) Prove using just the spider fusion law that the spider with no legs equals the ‘circle’ (i.e. the dimension):

$$\circ = \bigcirc$$

- (ii) Not all spiders are causal classical maps. Determine which spiders are causal, which can be made causal by rescaling by a number, and which cannot.

Exercise 4 (8.15): We saw in the lecture that a classical map has a matrix with only positive numbers. For instance the classical map characterised by

$$\begin{array}{c} \text{---} \\ \diagup \boxed{f} \diagdown \\ \text{---} \\ \text{---} \end{array} = \frac{2}{3} \begin{array}{c} \text{---} \\ \diagdown \end{array} + \frac{1}{3} \begin{array}{c} \text{---} \\ \diagup \end{array} \qquad \begin{array}{c} \text{---} \\ \diagup \boxed{f} \diagdown \\ \text{---} \\ \text{---} \end{array} = \frac{1}{3} \begin{array}{c} \text{---} \\ \diagdown \end{array} + \frac{2}{3} \begin{array}{c} \text{---} \\ \diagup \end{array}$$

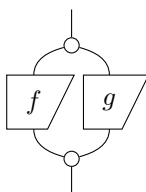
has the matrix

$$\begin{array}{c} \text{---} \\ \diagup \boxed{f} \diagdown \\ \text{---} \end{array} \leftrightarrow \begin{pmatrix} \frac{2}{3} & \frac{1}{3} \\ \frac{1}{3} & \frac{2}{3} \end{pmatrix}$$

However, if we change the basis the numbers in the matrix no longer have to be positive. Find a basis such that the matrix of f with respect to this basis contains some negative values.

Exercise 5 (8.26 & 8.55 & 8.69):

- (i) Show that for any two linear maps f and g of the same type, the diagram:



yields the Hadamard product of matrices:

$$\begin{pmatrix} f_1^1 & \cdots & f_D^1 \\ \vdots & \ddots & \vdots \\ f_1^D & \cdots & f_D^D \end{pmatrix} \star \begin{pmatrix} g_1^1 & \cdots & g_D^1 \\ \vdots & \ddots & \vdots \\ g_1^D & \cdots & g_D^D \end{pmatrix} = \begin{pmatrix} f_1^1 g_1^1 & \cdots & f_D^1 g_D^1 \\ \vdots & \ddots & \vdots \\ f_1^D g_1^D & \cdots & f_D^D g_D^D \end{pmatrix}$$

- (ii) For a classical map g , find a pure quantum map \hat{f} such that

$$\begin{array}{c} \text{---} \\ \diagdown \boxed{g} \diagup \\ \text{---} \end{array} = \begin{array}{c} \text{---} \\ \diagdown \boxed{\hat{f}} \diagup \\ \text{---} \end{array} := \begin{array}{c} \text{---} \\ \diagdown \boxed{f} \diagup \\ \text{---} \\ \text{---} \end{array}$$

Hint: Use the representation

$$\begin{array}{c} \text{---} \\ \diagdown \boxed{g} \diagup \\ \text{---} \end{array} = \sum_{ij} p_{ij}^j \begin{array}{c} \text{---} \\ \diagdown \end{array} \begin{array}{c} \text{---} \\ \diagup \end{array}$$

(iii) Show that a function map f (i.e. a deterministic causal classical map) satisfies

$$\begin{array}{c} \circ \\ \boxed{\hat{f}} \\ \circ \end{array} = \begin{array}{c} | \\ \boxed{f} \\ | \end{array}$$

Exercise 6 (9.2): Show that a normalised pure state is *unbiased* for an ONB-measurement if and only if for all i we have:

$$\begin{array}{c} \triangle i \\ | \\ \nabla \hat{\psi} \end{array} = \frac{1}{D}$$

Exercise 7 (9.21): In section 9.1, it was shown that any phase state of dimension D is of the form:

$$\begin{array}{c} | \\ \circ \hat{\alpha} \end{array} := \text{double} \left(\sum_{j=0}^{D-1} e^{i\alpha_j} \begin{array}{c} | \\ \nabla j \end{array} \right)$$

and furthermore that we can assume, up to a global phase, that $\alpha_0 = 0$. Hence, a D -dimensional phase state is labelled by a vector of $D - 1$ phases $\vec{\alpha} := (\alpha_2, \dots, \alpha_D)$.

Show that the phase group unit, addition, and inverse are defined in terms of these vectors as follows:

$$\begin{aligned} \vec{0} &:= (0, \dots, 0) \\ \vec{\alpha} + \vec{\beta} &= (\alpha_1 + \beta_1, \dots, \alpha_{D-1} + \beta_{D-1}) \\ -\vec{\alpha} &:= (-\alpha_1, \dots, -\alpha_{D-1}) \end{aligned}$$